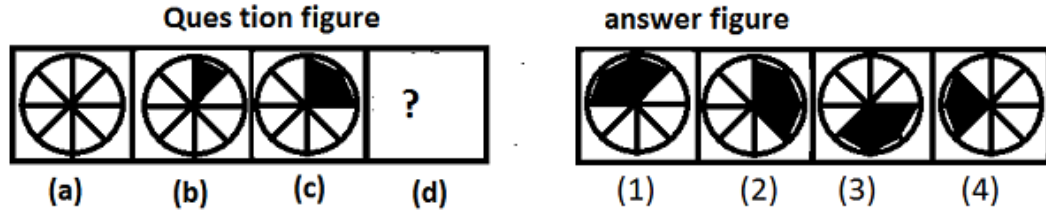




SNS College of Technology, Coimbatore-35.
(Autonomous)
B.E/B.Tech
Academic Year 2021-2022(Even)
Fourth Semester
19GET276 – VQAR II
(Common to all branches)

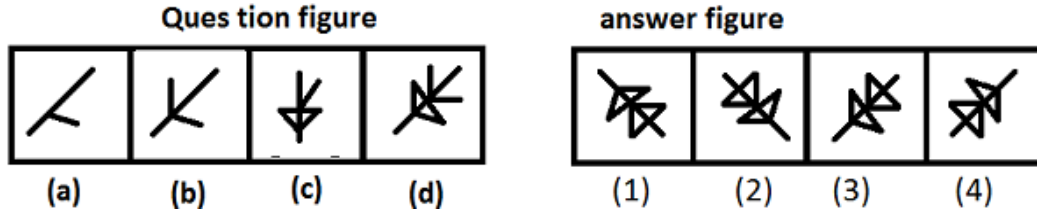
1. Find the figure that will replace the question mark.



- a) 1
- c) 3

- b) 2
- d) 4

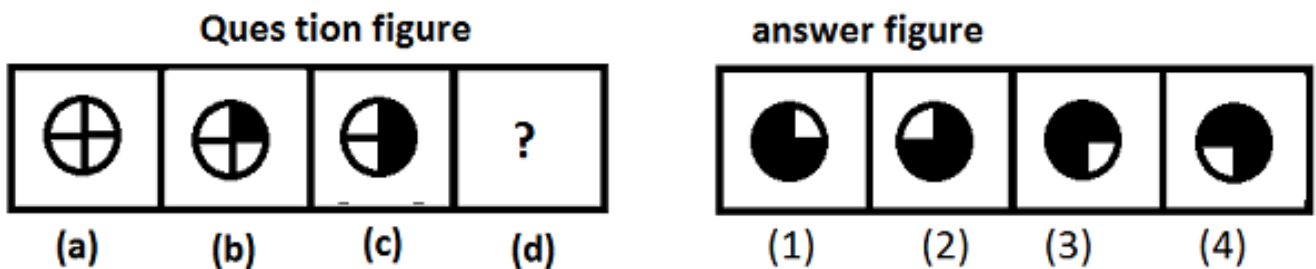
2. Which figure must continue series of figure?



- a) 1
- c) 3

- b) 2
- d) 4

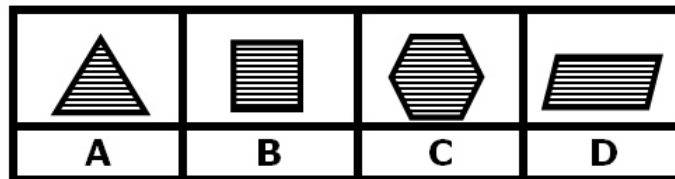
3. Which figure must continue series of figure?



- a) 1
- c) 3

- b) 2
- d) 4

4. Choose the shape which you think does not belong with the other three. (Odd one Out)



- a) A
- c) C

- b) B
- d) D

5. Choose the alternative which is closely resembles the mirror image of the given combination.

SUPERVISOR

(1) **RUOSIVREJUS**

(2) **ROBEVLISOR**

(3) **RSOUBSEBIV**

(4) **RSBEVLISOR**

a) 1

b) 2

c) 3

d) 4

6. Choose the alternative which is closely resembles the mirror image of the given combination.

TARAIN1014A

(1) **AR101NIARAL**

(2) **AR101NIARAT**

(3) **AR101NIRAT**

(4) **AR101NIARAT**

a) 1

b) 2

c) 3

d) 4

7. Choose the alternative which is closely resembles the mirror image of the given combination.

EFFECTIVE

(1) **EVITCEFFE**

(2) **EVITCEFFE**

(3) **EFFECTIVE**

(4) **EVITCEFFE**

a) 1

b) 2

c) 3

d) 4

8. Choose the alternative which is closely resembles the mirror image of the given combination.

FIXING

(1) **GNIXIF**

(2) **FIXING**

(3) **GNIXIF**

(4) **FIXING**

a) 1

b) 2

c) 3

d) 4

9. Choose the alternative which is closely resembles the water-image of the given combination.

NUCLEAR

(1) **RAEGCUI**

(2) **NUCTEAB**

(3) **NUCTEAB**

(4) **NUCTEAB**


a) 1

b) 2

c) 3

d) 4

10. Find out the alternative figure which contains figure (X) as its part.



(1)

(2)

(3)

(4)

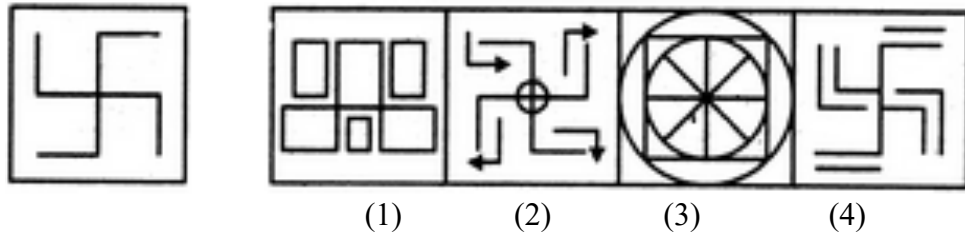
a) 1

b) 2

c) 3

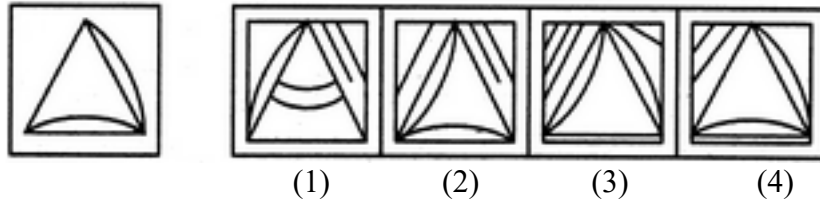
d) 4

11. Find out the alternative figure which contains figure (X) as its part.



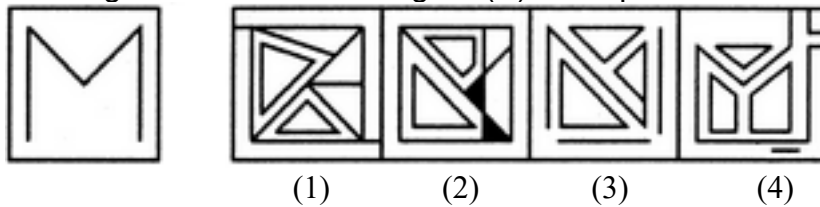
- a) 1
- b) 2
- c) 3
- d) 4

12. Find out the alternative figure which contains figure (X) as its part.



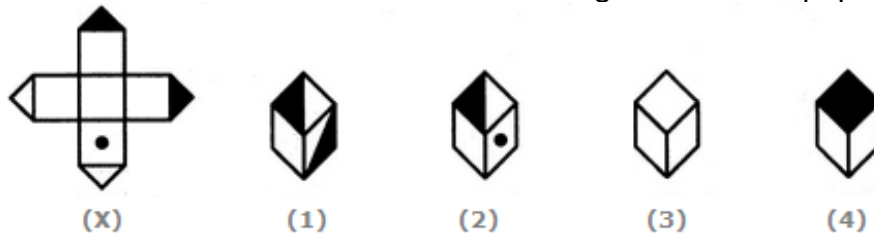
- a) 1
- b) 2
- c) 3
- d) 4

13. Find out the alternative figure which contains figure (X) as its part.



- a) 1
- b) 2
- c) 3
- d) 4

14. Choose the box that is similar to the box formed from the given sheet of paper (X).



- a) 1 and 2 only
- b) 2 and 4 only
- c) 2 and 3 only
- d) 1 and 4 only

15. Choose the box that is similar to the box formed from the given sheet of paper (X).



- a) 1
- b) 2
- c) 3
- d) 4

16. Choose the box that is similar to the box formed from the given sheet of paper (X).



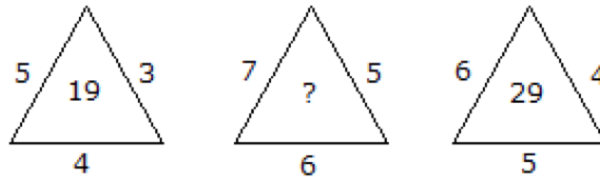
a) 1 and 3 only

b) 2 and 4 only

c) 3 and 4 only

d) 1 and 4 only

17. Which one will replace the question mark ?



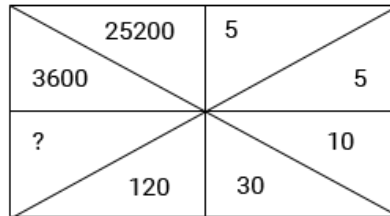
a) 25

b) 37

c) 41

d) 47

18. Which one will replace the question mark ?



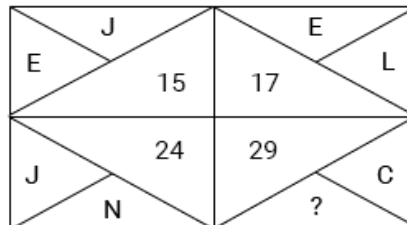
a) 350

b) 320

c) 500

d) 600

19. Which one will replace the question mark ?



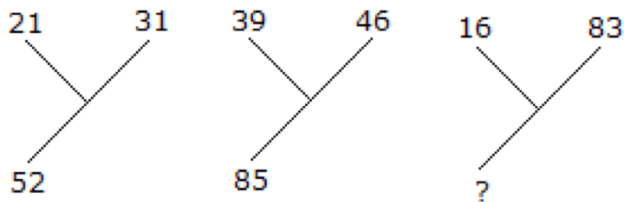
a) M

b) Z

c) Q

d) S

20. Which one will replace the question mark ?



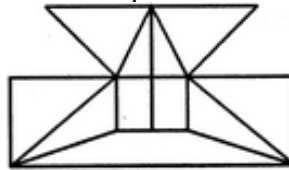
a) 92

b) 72

c) 62

d) 99

21. Find the minimum number of straight lines required to make the given figure.



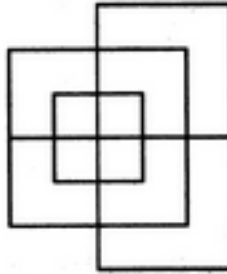
a) 16

b) 17

c) 18

d) 19

22. Find the minimum number of straight lines required to make the given figure.



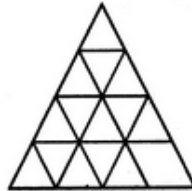
a) 13

b) 15

c) 17

d) 19

23. Find the minimum number of straight lines required to make the given figure.



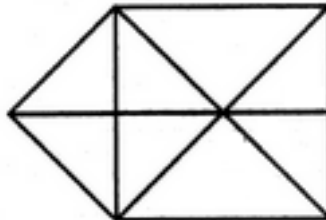
a) 9

b) 11

c) 15

d) 16

24. Find the number of triangles in the given figure.



a) 15

b) 16

c) 17

d) 18

25. Identify the type of sentence
The son went to play so the father started working.

a) Simple Sentence

b) Compound Sentence

c) Complex Sentence

d) Mixed Sentence

26. Identify the type of sentence
Roses are beautiful flowers.

a) Simple Sentence

b) Compound Sentence

c) Complex Sentence

d) Mixed Sentence

27. Identify the type of sentence
He lost everything that was unbearable.

a) Simple Sentence

b) Compound Sentence

c) Complex Sentence

d) Mixed Sentence

28. Identify the type of sentence
He lost his money but he did not lose his patience.

a) Simple Sentence

b) Compound Sentence

c) Complex Sentence

d) Mixed Sentence

29. Rearrange the sentence

Since independence(1), on the necessity of(A)/ application of Uniform civil Code(B)/ we have been debating(C)/ for all the citizens(D)

a) CADB

b) ABCD

c) CABD

d) ACBD

30. Word Substitution:

The study of ancient societies

a) Anthropology

b) Archaeology

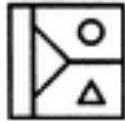
c) History

d) Ethnology

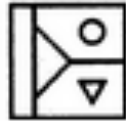
31. Choose the correct water image of the given figure (X) from amongst the four alternatives.



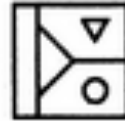
(X)



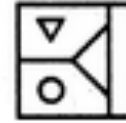
(1)



(2)



(3)



(4)

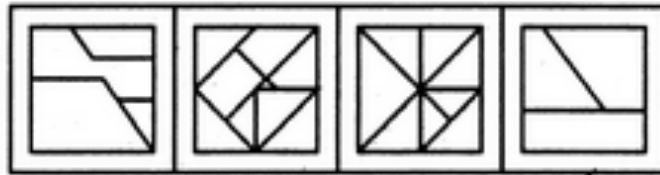

a) 1

b) 2

c) 3

d) 4

32. Find out the alternative figure which contains figure (X) as its part.



(1)

(2)

(3)

(4)

a) 1

b) 2

c) 3

d) 4

33. Three positions of a dice are given. Based on them find out which number is found opposite the number 2 in the given cube.



(i)



(ii)



(iii)

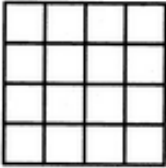
a) 6

b) 5

c) 3

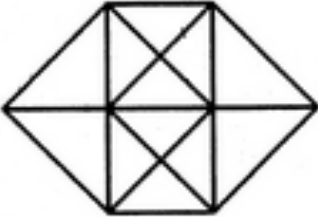
d) 1

34. Count the number of squares in the given figure.



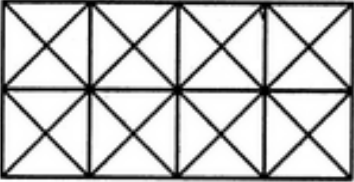
- a) 32
- b) **30**
- c) 29
- d) 28

35. Find the number of triangles in the given figure.



- a) 20
- b) 24
- c) **28**
- d) 32

36. Count the number of squares in the given figure.

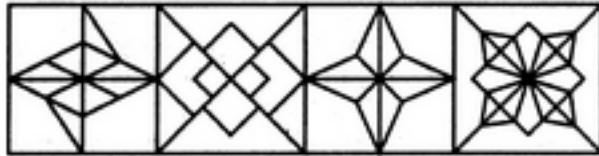


- a) 11
- b) 21
- c) **24**
- d) 26

37. Find out the alternative figure which contains figure (X) as its part.



(X)



(1)

(2)

(3)

(4)

- a) 1
- b) 2
- c) 3
- d) **4**

38. Identify the type of sentence:
I imagined that I lived in a palace.

- a) Simple Sentence
- b) Compound Sentence
- c) **Complex Sentence**
- d) Mixed Sentence

39. Identify the type of sentence:
Many tries but few get success.

- a) Simple Sentence
- b) **Compound Sentence**
- c) Complex Sentence
- d) Mixed Sentence

40. Identify the type of sentence:
It was the most wonderful place to live.

- a) **Simple Sentence**
- b) Compound Sentence
- c) Complex Sentence
- d) Mixed Sentence

41. He finished his home assignment and went to play.
a) Simple Sentence **b) Compound Sentence**
c) Complex Sentence d) Mixed Sentence
42. He who always does his duty is loved by all but a man who does not work is hated by all.
a) Simple Sentence b) Compound Sentence
c) Complex Sentence d) Mixed Sentence
43. Sentence Rearrangement:
A get some peace(A)/ he left home(B)/ his parents could (C)/ in order that(D)
a) DCAB b) ADCB
c) BDCA d) CBDA
44. Sentence Rearrangement:
Since independence/on the necessity of (A)/ application of Uniform Civil code (B)/ we have been
debating (C)/ for all the citizens(D)
a) CADB b) ABCD
c) CABD d) ACBD
45. Sentence Rearrangement:
coal as a fuel(A)/ in place of wood(B)/ during this period (C)/ people were beginning to use(D)
a) BDAC b) ACDB
c) CDAB d) DCAB
46. Sentence Rearrangement:
try to use the camera(A)/ carefully(B)/ before you(C)/ read the manual(D)
a) ACBD **b) CADB**
c) BDCA d) DCAB
47. Word Substitution:
List of the business or subjects to be considered at a meeting
a) Schedule b) Timetable
c) Agenda d) Plan
48. Synonyms
BRIEF
a) Limited b) Small
c) Little **d) Short**
49. Antonyms
COMMISSIONED
a) Started b) Closed
c) Finished **d) Terminated**
50. Antonyms
CROWDED
a) Busy b) Congested
c) Quiet **d) Deserted**